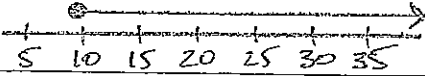

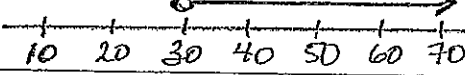
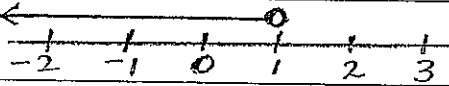



MATH	NAME:
INTERVAL NOTATION PRACTICE	DATE:

	INEQUALITY	GRAPH	INTERVAL NOTATION
1.	$x \leq 5$		
2.			$[2, \infty$
3.			
4.			$[5, 10]$
5.	$-1 < x < 4$		
6.			$]4, 8]$
7.	$x < -5$		
8.	"x is any number"		
9.			
10.			
11.	"x is greater than -2"		
12.	"x is greater than or equal to 1"		
13.			
14.	$x > -2$		
15.	$-2 \leq x \leq 8$		
16.			
17.	$3 \leq x < 7$		
18.			$]0, 2[$
19.	$0 < x \leq 3$		
20.	$x \geq -1$		